

Math-Geometry Time Test
4 Min./3 Min.

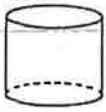
Name- _____

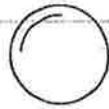
Word Bank: (Plane and Space Figures)

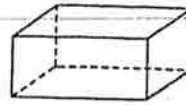
Sphere
Pyramid

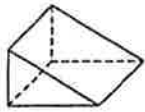
Cylinder
Cone

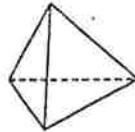
Rectangular Prism
Triangular Prism

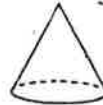












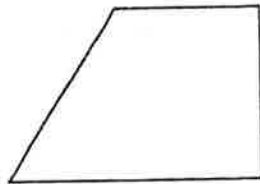
Word Bank: (Polygons and Angles)

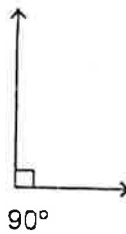
Triangle
Hexagon
Vertex

Quadrilateral
Octagon
Obtuse Angle


Pentagon
Right Angle
Acute Angle

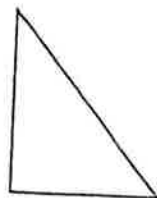


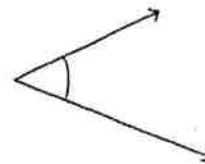














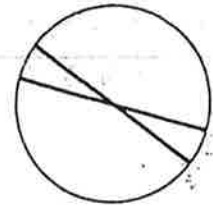
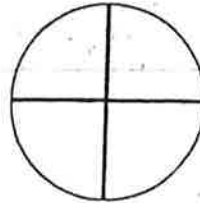
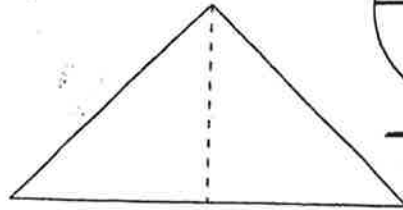
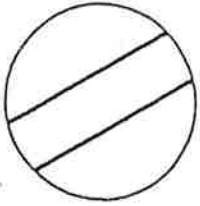


Word Bank: (Lines)

Intersecting
Line of Symmetry

Perpendicular

Parallel



Word Bank: (Triangles and Quadrilaterals)

Isosceles Triangle
Equilateral Triangle
Square
Rectangle

Right Triangle
Parallelogram
Trapezoid

