
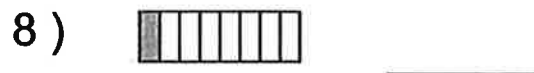
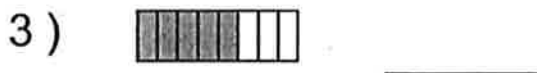

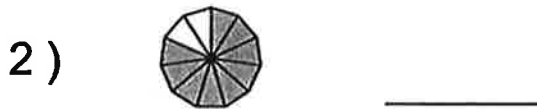

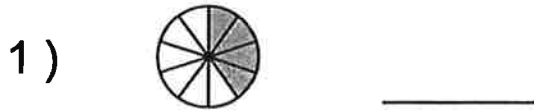



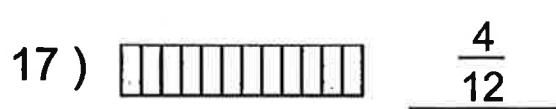
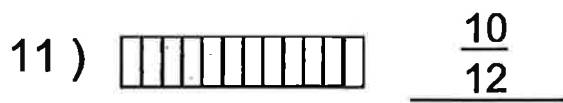
Name : _____ Score : _____

Teacher : _____ Date : _____

What is the Fraction of the Shaded Area ?



Shade the Figure with the Indicated Fraction.



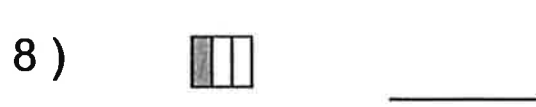
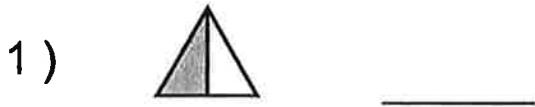
Name : _____

Score : _____

Teacher : _____

Date : _____

What is the Fraction of the Shaded Area ?



Shade the Figure with the Indicated Fraction.

